







## Mathematics Worksheets - Year 2

### Worksheet - Counting to 1000

1. How many blocks are there? Write the number in the box.



2. Write the numbers in words





**3. Write the following numbers in words.**


- a) 981
- b) 762
- c) 879
- d) 456
- e) 823
- f) 245
- g) 165

**4. Write the following numbers in numerical form**

- a. one hundred and eighty four
- b. eight hundred and forty four
- c. three hundred and seventy eight



5. How much do the counters add up to? Write your answer in the box.





## Answers

1. 350

2.



One thousand



six hundred and eighty  
two



Five hundred and seventy  
eight



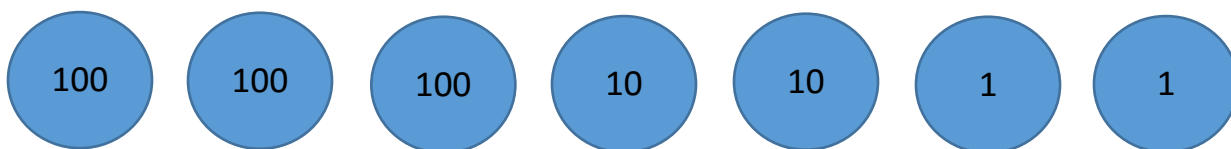
3. Write the following numbers in words.

- h) 981 – nine hundred and eighty one
- i) 762 – seven hundred and sixty two
- j) 879 – eight hundred and seventy nine
- k) 456 – four hundred and fifty six
- l) 823 – eight hundred and twenty three
- m) 245 – two hundred and forty five
- n) 165 – one hundred and sixty five

4. Write the following numbers in numerical form

- a. one hundred and eighty four - 184
- b. eight hundred and forty four - 844
- c. three hundred and seventy eight - 378

5. How much do the counters add up to? Write your answer in the box.



322